



# Trinity College London: Initial Piano Exam








## Musical Knowledge Section

My Name: .....

Piece 1: .....

Piece 2: .....

Piece 3: .....

<b>Q: What is the Key Signature of Piece 1?</b>	<b>Q: What is the Key Signature of Piece 2?</b>	<b>Q: What is the Key Signature of Piece 3?</b>
<b>Answer:</b>	<b>A:</b>	<b>A:</b>
<b>What is the Time Signature of Piece 1? Explain the meaning.</b>	<b>What is the Time Signature of Piece 2? Explain the meaning.</b>	<b>What is the Time Signature of Piece 3? Explain the meaning.</b>
<b>A:</b>	<b>A:</b>	<b>A:</b>
<b>Give the name and meaning of the following symbols:</b>		
$\frac{2}{4}$	$\frac{4}{4}$	 (Note name and value)
 (Rest name and value)	  (Name and meaning of the symbol above the note)	
	 (What is the total value of this group of notes? What is each note called?)	